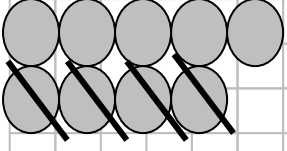
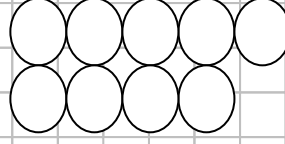


75. YIL İLKOKULU 1 /C SINIFI ÇIKARMA İŞLEMİ ALIŞTIRMALAR-2

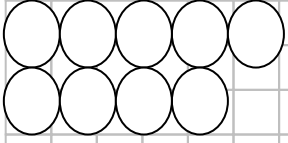
Aşağıdaki çıkarma işlemlerini verilen örneğe uygun olarak yapınız.



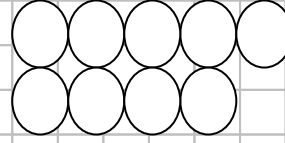
$$9-4=5$$



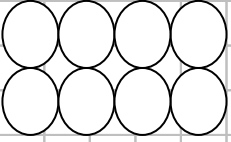
$$9-5=$$



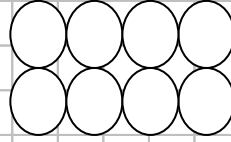
$$9-6=$$



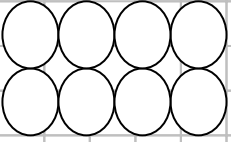
$$9-7=$$



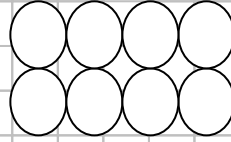
$$8-5=$$



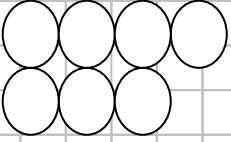
$$8-3=$$



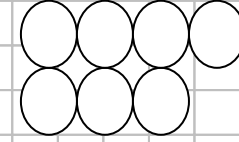
$$8-4=$$



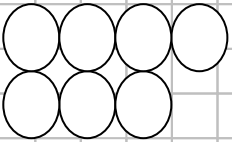
$$8-2=$$



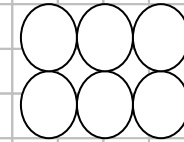
$$7-4=$$



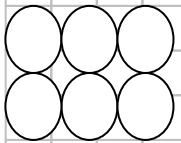
$$7-6=$$



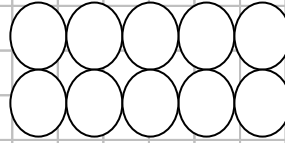
$$7-3=$$



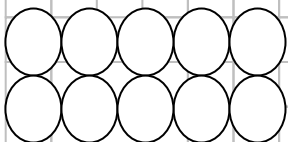
$$6-5=$$



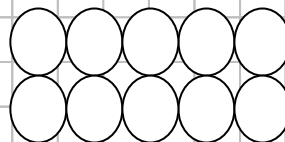
$$6-4=$$



$$10-8=$$



$$10-5=$$



$$10-9=$$