

3. SINIF

MATEMATİK DERSİ 13. HAFTA ÇALIŞMA KÂĞIDI

- Aşağıdaki nesnelerin sayısını önce toplama sonra çarpma işlemiyle bulalım.



$$..... + + + + =$$

$$..... \times =$$




$$..... + + + =$$

$$..... \times =$$



$$..... + + + + =$$

$$..... \times =$$

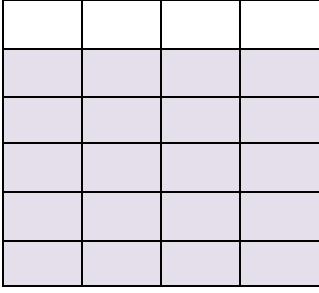


$$..... + + + + + =$$

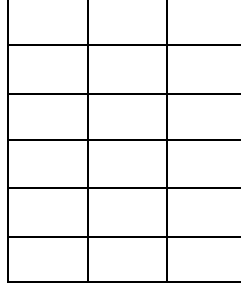
$$..... \times =$$

- Çarpma işlemlerini şekillerden yararlanarak örnekteki gibi yapalım.

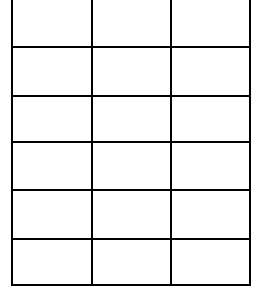
$5 \times 4 = 20$




$4 \times 3 = \dots\dots$




$6 \times 3 = \dots\dots$



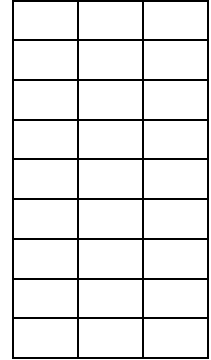
$4 \times 8 = \dots\dots$



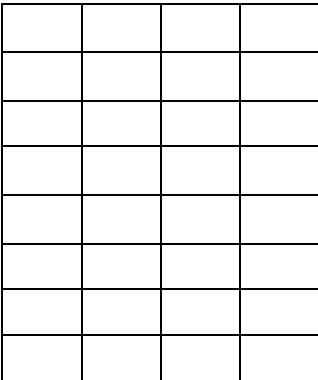
$5 \times 5 = \dots\dots$



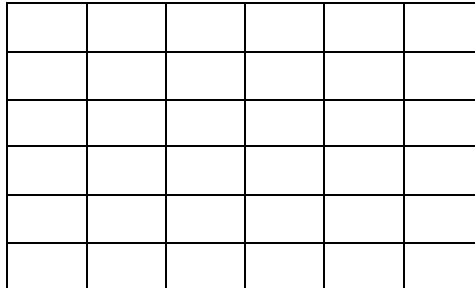
$8 \times 3 = \dots\dots$



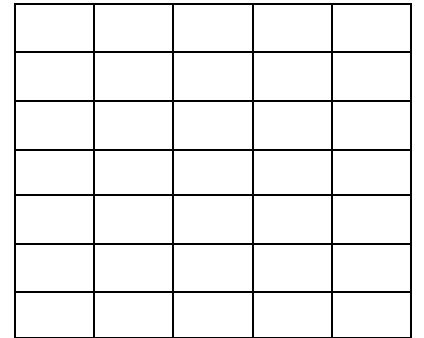
$7 \times 4 = \dots\dots$



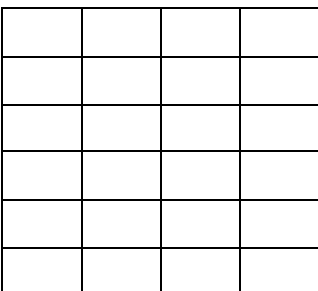
$6 \times 6 = \dots\dots$




$7 \times 5 = \dots\dots$



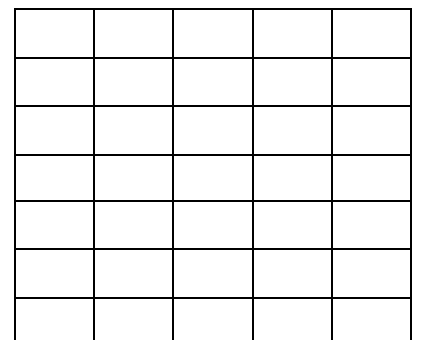
$4 \times 4 = \dots\dots$



$2 \times 8 = \dots\dots$



$6 \times 5 = \dots\dots$



♥ Verilen arpım tablolarını tamamlayalım.

$1 \times 6 = \dots$

$2 \times 6 = \dots$

$3 \times 6 = \dots$

$4 \times 6 = \dots$

$5 \times 6 = \dots$

$6 \times 6 = \dots$

$7 \times 6 = \dots$

$8 \times 6 = \dots$

$9 \times 6 = \dots$

$10 \times 6 = \dots$



$1 \times 7 = \dots$

$2 \times 7 = \dots$

$3 \times 7 = \dots$

$4 \times 7 = \dots$

$5 \times 7 = \dots$

$6 \times 7 = \dots$

$7 \times 7 = \dots$

$8 \times 7 = \dots$

$9 \times 7 = \dots$

$10 \times 7 = \dots$



$1 \times 8 = \dots$

$2 \times 8 = \dots$

$3 \times 8 = \dots$

$4 \times 8 = \dots$

$5 \times 8 = \dots$

$6 \times 8 = \dots$

$7 \times 8 = \dots$

$8 \times 8 = \dots$

$9 \times 8 = \dots$

$10 \times 8 = \dots$



$1 \times 9 = \dots$

$2 \times 9 = \dots$

$3 \times 9 = \dots$

$4 \times 9 = \dots$

$5 \times 9 = \dots$


$6 \times 9 = \dots$

$7 \times 9 = \dots$

$8 \times 9 = \dots$

$9 \times 9 = \dots$

$10 \times 9 = \dots$



♥ Verilen arpım tablosu hazırlama etkinliğinde boş bırakılan yerleri dolduralım.

ARPIM TABLOSU YAZIRLIYORUM

X	1	2	3	4	5	6	7	8	9	10
1	1				5					
2		4					14			
3			9					24		30
4				16			28			
5		10							45	
6			18			36				
7					35		49			
8	8			32						
9						54			81	
10	10			40				80		100

♥ Verilen arpma işlemlerini hazırladığımız arpım tablosu yardımı ile yapalım.

$7 \times 6 = \dots$

$8 \times 5 = \dots$

$5 \times 9 = \dots$

$8 \times 3 = \dots$

$9 \times 10 = \dots$

$8 \times 4 = \dots$

$9 \times 6 = \dots$

$7 \times 8 = \dots$

$4 \times 9 = \dots$

$8 \times 9 = \dots$

$9 \times 7 = \dots$

$7 \times 7 = \dots$

$8 \times 8 = \dots$

$7 \times 5 = \dots$

$6 \times 6 = \dots$

$10 \times 6 = \dots$

$6 \times 7 = \dots$

$9 \times 9 = \dots$

$5 \times 8 = \dots$

$10 \times 10 = \dots$