




Aşağıdaki yan yana ve alt alta verilen toplama işlemlerini yapınız.



$$\square + \square = \square$$




$$\square$$




$$\square$$


$$\begin{array}{r} + \\ \hline \square \end{array}$$



$$\square + \square = \square$$




$$\square$$




$$\square$$

$$\begin{array}{r} + \\ \hline \square \end{array}$$



$$\square + \square = \square$$



$$\square$$



$$\square$$

$$\begin{array}{r} + \\ \hline \square \end{array}$$