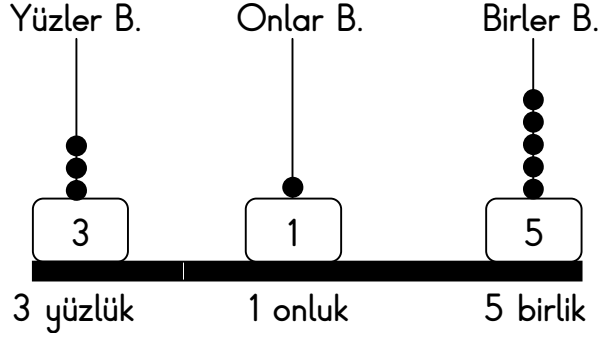
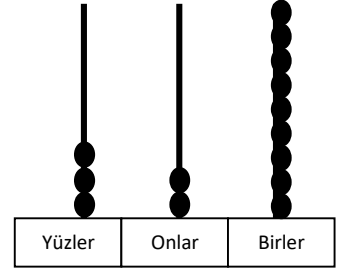
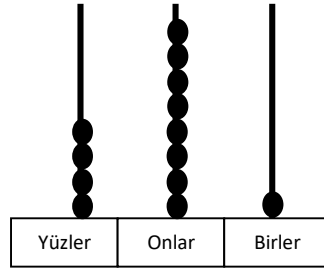
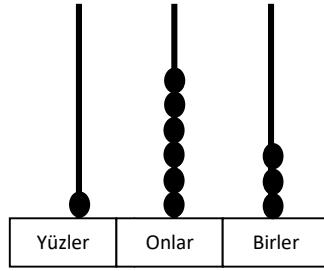
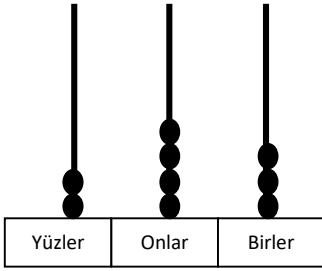


ÜÇ BASAMAKLI DOĞAL SAYILARIN ABAKÜSLE GÖSTERİLMESİ

İki basamaklı doğal sayıları abaküsle gösterirken iki bölümümüz vardı. Onlar Basamağı ve Birler Basamağı. Üç basamaklı doğal sayılarda ise üç bölüm olur.



Aşağıda abaküsle verilmiş sayıların hangi sayılar olduğunu bulup altlarına yazalım.

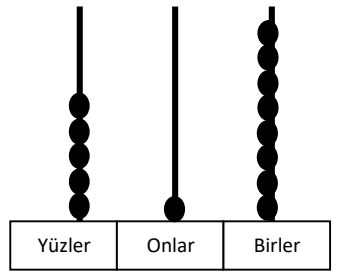
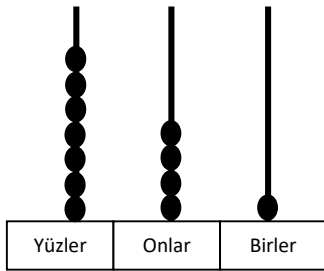
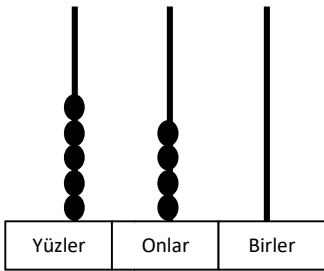
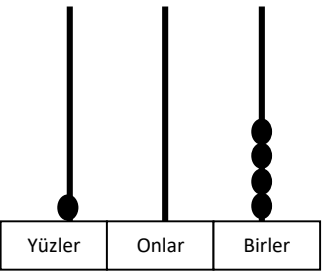


.....

.....

.....

.....

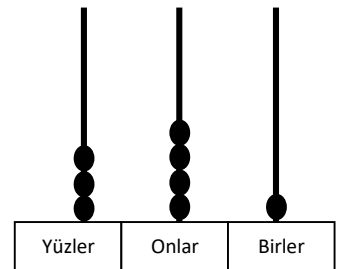
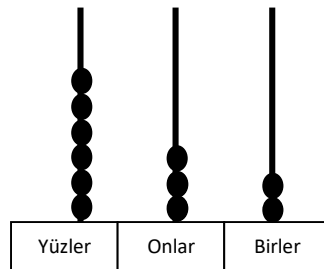
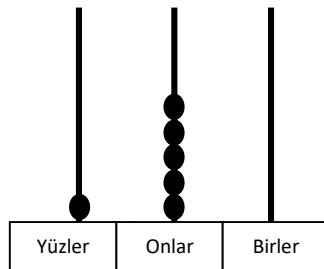
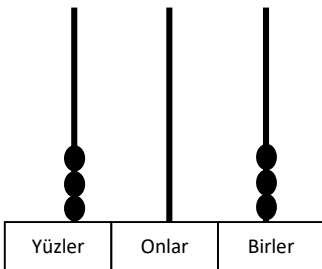


.....

.....

.....

.....



.....

.....

.....

.....



Aşağıda verilen sayıları abaküs üzerinde gösteriniz.

